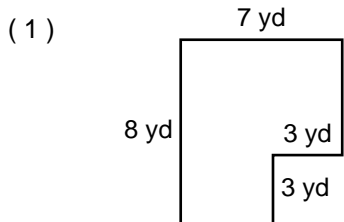


Calculating Area & Perimeter

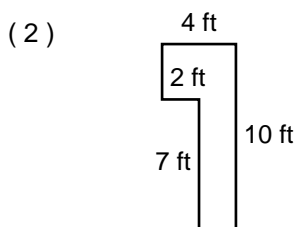
Name: _____ Date: _____

Calculate the area and perimeter of each shape.



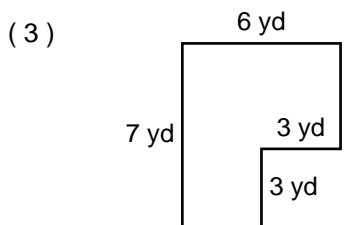
Perimeter: _____

Area: _____



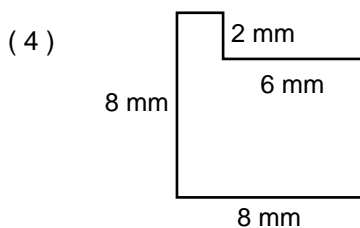
Perimeter: _____

Area: _____



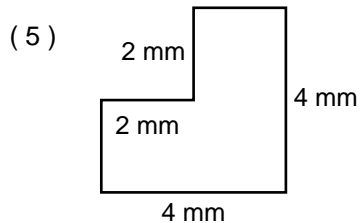
Perimeter: _____

Area: _____



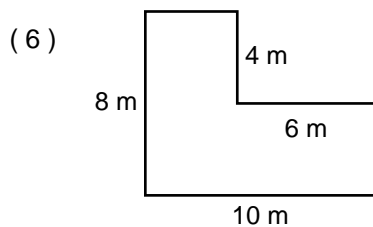
Perimeter: _____

Area: _____



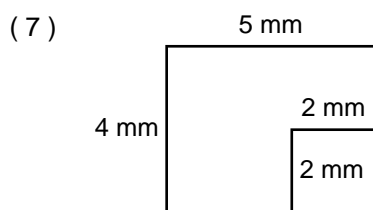
Perimeter: _____

Area: _____



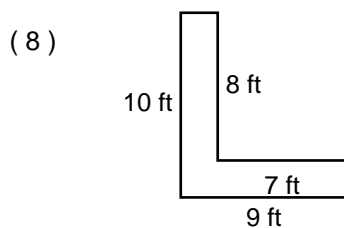
Perimeter: _____

Area: _____



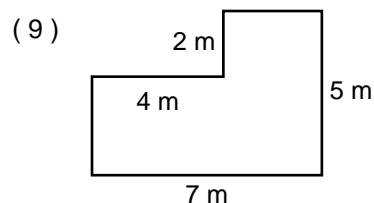
Perimeter: _____

Area: _____



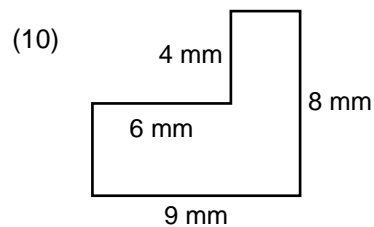
Perimeter: _____

Area: _____



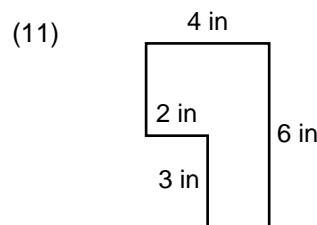
Perimeter: _____

Area: _____



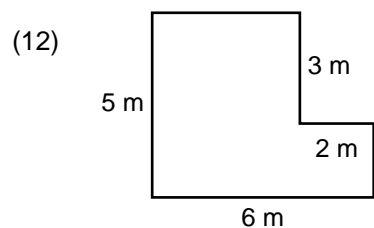
Perimeter: _____

Area: _____



Perimeter: _____

Area: _____



Perimeter: _____

Area: _____

Calculating Area & Perimeter

ANSWER KEY

Calculate the area and perimeter of each shape.

(1)

Perimeter: 30 yd
Area: 47 yd²

(2)

Perimeter: 28 ft
Area: 26 ft²

(3)

Perimeter: 26 yd
Area: 33 yd²

(4)

Perimeter: 32 mm
Area: 52 mm²

(5)

Perimeter: 16 mm
Area: 12 mm²

(6)

Perimeter: 36 m
Area: 56 m²

(7)

Perimeter: 18 mm
Area: 16 mm²

(8)

Perimeter: 38 ft
Area: 34 ft²

(9)

Perimeter: 24 m
Area: 27 m²

(10)

Perimeter: 34 mm
Area: 48 mm²

(11)

Perimeter: 20 in
Area: 18 in²

(12)

Perimeter: 22 m
Area: 24 m²